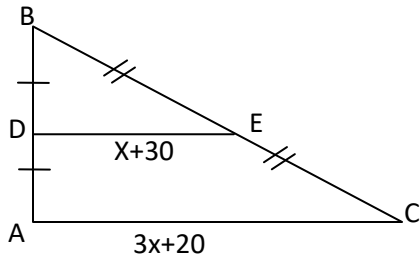


Topic 16  
Midsegments  
Practice Quiz

1)

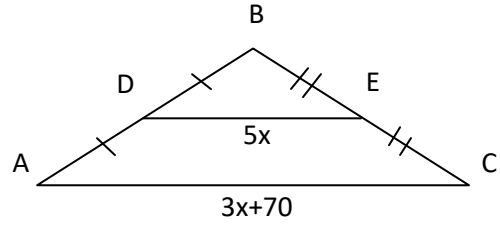


$$x =$$

$$\overline{AC} =$$

$$\overline{DE} =$$

2)

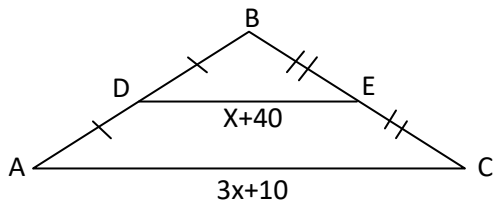


$$x =$$

$$\overline{AC} =$$

$$\overline{DE} =$$

3)

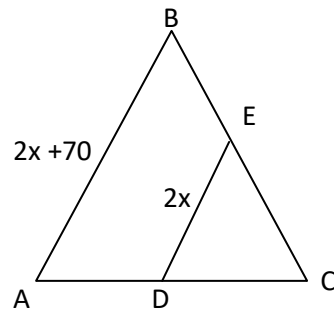


$$x =$$

$$\overline{AC} =$$

$$\overline{DE} =$$

4)



$$x =$$

$$\overline{AB} =$$

$$\overline{DE} =$$

Topic 17  
Medians  
Practice Quiz

1) Construct an equilateral triangle and the medians using any geometry tools you choose.

2) What is a Centroid?