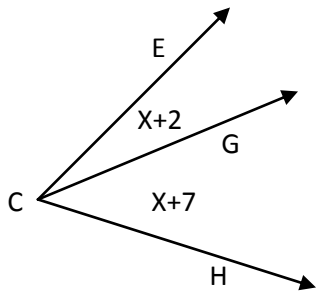
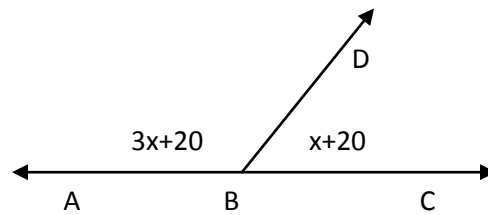


1)



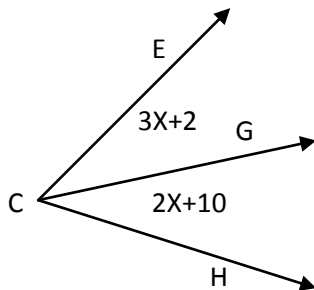
If angle ECH equals 79, find the value of x and the size of each angle in degrees.

2) Angle ABC is a straight angle



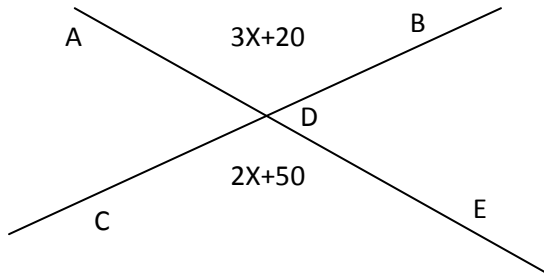
Find the value of x and the size of each angle in degrees.

3)



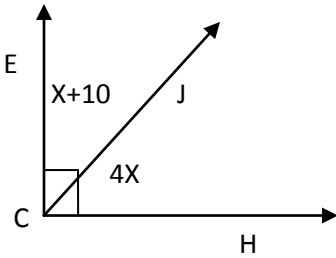
Ray CG is an angle bisector, find the value of x and the size of each angle in degrees.

4)



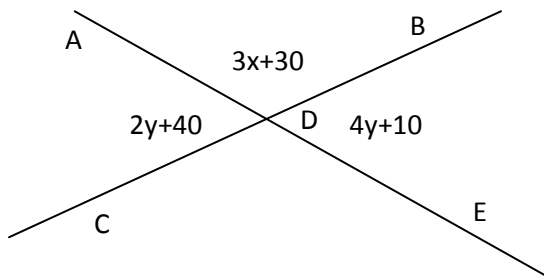
Find the value of x and the size of each angle in degrees.

5)



Find the value of x and the size of each angle in degrees.

6)



Find the value of x & y and the size of each angle in degrees.