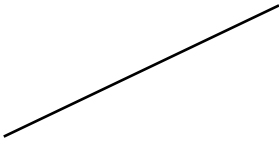


Lesson #4: Constructions

Copy a Segment

1)



2)

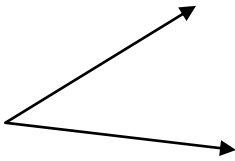


3)

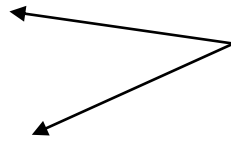


Copy an Angle

4)



5)

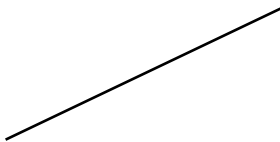


6)




Perpendicular Bisector of a Segment

7)



8)

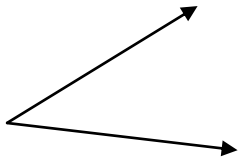


9)

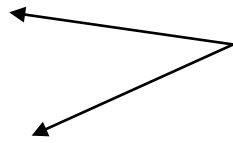


Bisect an Angle

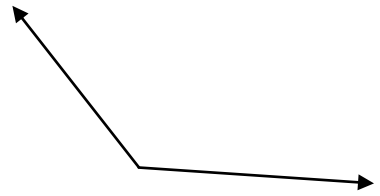
10)



11)

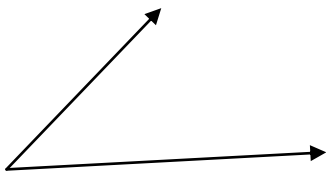


12)



Practice Quiz #4: Constructions

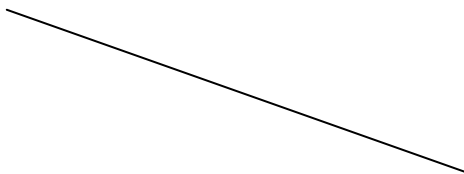
1) Copy an Angle



2) Copy a Segment



3) Perpendicular Bisector of a Segment



4) Bisect an Angle

