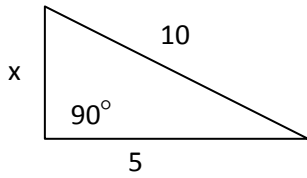


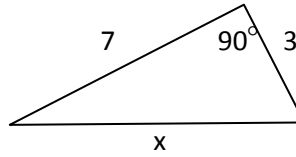
Topic 25 Pythagorean Theorem

Quiz Ver Practice

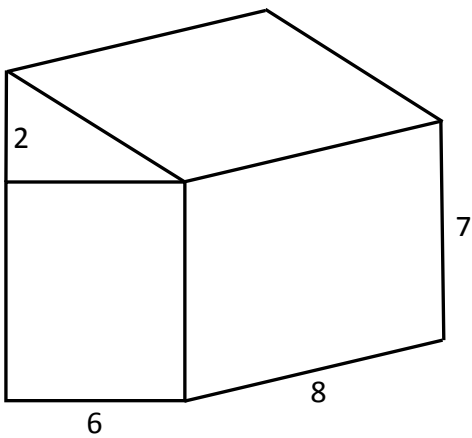
1) Find the value of x



2) Find the value of x



3) A garden shed with the given dimensions (in feet : 12 inches per foot) is built. You want to install a solar panel that is 65 inches by 39 inches on the roof. Will the panel fit? Show your calculations are proof.



4) Find the height of the given triangle.

